

Surname		Other Names	
Centre Number		Candidate Number	
Candidate Signature			

Leave blank
-------------

General Certificate of Education  
January 2004  
Advanced Level Examination



**PHYSICS (SPECIFICATION A) PHA8/W**  
**Unit 8 Nuclear Instability: Turning Points in Physics Option**

Monday 26 January 2004 Morning Session

**In addition to this paper you will require:**

- a calculator;
- a pencil and a ruler.

For Examiner's Use			
Number	Mark	Number	Mark
1			
2			
3			
4			
5			
Total (Column 1)	→		
Total (Column 2)	→		
TOTAL			
Examiner's Initials			

Time allowed: 1 hour 15 minutes

**Instructions**

- Use blue or black ink or ball-point pen.
- Fill in the boxes at the top of this page.
- Answer **all** questions in the spaces provided. All working must be shown.
- Do all rough work in this book. Cross through any work you do not want marked.

**Information**

- The maximum mark for this paper is 40.
- Mark allocations are shown in brackets.
- The paper carries 10% of the total marks for Physics Advanced.
- A *Data Sheet* is provided on pages 3 and 4. You may wish to detach this perforated sheet at the start of the examination.
- You are expected to use a calculator where appropriate.
- In questions requiring description and explanation you will be assessed on your ability to use an appropriate form and style of writing, to organise relevant information clearly and coherently, and to use specialist vocabulary where appropriate. The degree of legibility of your handwriting and the level of accuracy of your spelling, punctuation and grammar will also be taken into account.

**Data Sheet**

- A perforated *Data Sheet* is provided as pages 3 and 4 of this question paper.
- This sheet may be useful for answering some of the questions in the examination.
- You may wish to detach this sheet before you begin work.

# Data Sheet

Fundamental constants and values				Mechanics and Applied Physics		Fields, Waves, Quantum Phenomena	
Quantity	Symbol	Value	Units				
speed of light in vacuo	$c$	$3.00 \times 10^8$	$\text{m s}^{-1}$	$v = u + at$	$g = \frac{F}{m}$		
permeability of free space	$\mu_0$	$4\pi \times 10^{-7}$	$\text{H m}^{-1}$	$s = \left(\frac{u+v}{2}\right)t$	$g = -\frac{GM}{r^2}$		
permittivity of free space	$\epsilon_0$	$8.85 \times 10^{-12}$	$\text{F m}^{-1}$	$s = ut + \frac{at^2}{2}$	$g = -\frac{\Delta V}{\Delta x}$		
charge of electron	$e$	$1.60 \times 10^{-19}$	C	$v^2 = u^2 + 2as$	$V = -\frac{GM}{r}$		
the Planck constant	$h$	$6.63 \times 10^{-34}$	J s	$F = \frac{\Delta(mv)}{\Delta t}$	$a = -(2\pi f)^2 x$		
gravitational constant	$G$	$6.67 \times 10^{-11}$	$\text{N m}^2 \text{kg}^{-2}$	$P = Fv$	$v = \pm 2\pi f \sqrt{A^2 - x^2}$		
the Avogadro constant	$N_A$	$6.02 \times 10^{23}$	$\text{mol}^{-1}$	$\text{efficiency} = \frac{\text{power output}}{\text{power input}}$	$x = A \cos 2\pi ft$		
molar gas constant	$R$	8.31	$\text{J K}^{-1} \text{mol}^{-1}$	$\omega = \frac{v}{r} = 2\pi f$	$T = 2\pi \sqrt{\frac{m}{k}}$		
the Boltzmann constant	$k$	$1.38 \times 10^{-23}$	$\text{J K}^{-1}$	$a = \frac{v^2}{r} = r\omega^2$	$T = 2\pi \sqrt{\frac{l}{g}}$		
the Stefan constant	$\sigma$	$5.67 \times 10^{-8}$	$\text{W m}^{-2} \text{K}^{-4}$	$I = \sum mr^2$	$\lambda = \frac{\omega s}{D}$		
the Wien constant	$\alpha$	$2.90 \times 10^{-3}$	m K	$E_k = \frac{1}{2} I\omega^2$	$d \sin \theta = n\lambda$		
electron rest mass	$m_e$	$9.11 \times 10^{-31}$	kg	$\omega_2 = \omega_1 + at$	$\theta \approx \frac{\lambda}{D}$		
(equivalent to $5.5 \times 10^{-4}u$ )				$\theta = \omega_1 t + \frac{1}{2} at^2$	$1n_2 = \frac{\sin \theta_1}{\sin \theta_2} = \frac{c_1}{c_2}$		
electron charge/mass ratio	$e/m_e$	$1.76 \times 10^{11}$	$\text{C kg}^{-1}$	$\omega_2^2 = \omega_1^2 + 2a\theta$	$1n_2 = \frac{n_2}{n_1}$		
proton rest mass	$m_p$	$1.67 \times 10^{-27}$	kg	$\theta = \frac{1}{2}(\omega_1 + \omega_2)t$	$\sin \theta_c = \frac{1}{n}$		
(equivalent to 1.00728u)				$T = I\alpha$	$E = hf$		
proton charge/mass ratio	$e/m_p$	$9.58 \times 10^7$	$\text{C kg}^{-1}$	$\text{angular momentum} = I\omega$	$hf = \phi + E_k$		
neutron rest mass	$m_n$	$1.67 \times 10^{-27}$	kg	$W = T\theta$	$hf = E_1 - E_2$		
(equivalent to 1.00867u)				$P = T\omega$	$\lambda = \frac{h}{p} = \frac{h}{mv}$		
gravitational field strength	$g$	9.81	$\text{N kg}^{-1}$	$\text{angular impulse} = \text{change of angular momentum} = Tt$	$c = \frac{1}{\sqrt{\mu_0 \epsilon_0}}$		
acceleration due to gravity	$g$	9.81	$\text{m s}^{-2}$	$\Delta Q = \Delta U + \Delta W$	<b>Electricity</b>		
atomic mass unit	$u$	$1.661 \times 10^{-27}$	kg	$\Delta W = p\Delta V$	$\epsilon = \frac{E}{Q}$		
(1u is equivalent to 931.3 MeV)				$pV^\gamma = \text{constant}$	$\epsilon = I(R+r)$		
<b>Fundamental particles</b>				$\text{work done per cycle} = \text{area of loop}$	$\frac{1}{R_T} = \frac{1}{R_1} + \frac{1}{R_2} + \frac{1}{R_3} + \dots$		
<i>Class</i>	<i>Name</i>	<i>Symbol</i>	<i>Rest energy</i>	$\text{input power} = \text{calorific value} \times \text{fuel flow rate}$	$R_T = R_1 + R_2 + R_3 + \dots$		
			/MeV	$\text{indicated power as (area of } p-V \text{ loop)} \times (\text{no. of cycles/s}) \times (\text{no. of cylinders})$	$P = I^2 R$		
photon	photon	$\gamma$	0	$\text{friction power} = \text{indicated power} - \text{brake power}$	$E = \frac{F}{Q} = \frac{V}{d}$		
lepton	neutrino	$\nu_e$	0	$\text{efficiency} = \frac{W}{Q_{in}} = \frac{Q_{in} - Q_{out}}{Q_{in}}$	$E = \frac{1}{4\pi\epsilon_0} \frac{Q}{r^2}$		
		$\nu_\mu$	0	$\text{maximum possible efficiency} = \frac{T_H - T_C}{T_H}$	$E = \frac{1}{2} QV$		
	electron	$e^\pm$	0.510999		$F = BI$		
	muon	$\mu^\pm$	105.659		$F = BQv$		
mesons	pion	$\pi^\pm$	139.576		$Q = Q_0 e^{-t/RC}$		
		$\pi^0$	134.972		$\Phi = BA$		
	kaon	$K^\pm$	493.821				
		$K^0$	497.762				
baryons	proton	$p$	938.257				
	neutron	$n$	939.551				
<b>Properties of quarks</b>							
<i>Type</i>	<i>Charge</i>	<i>Baryon number</i>	<i>Strangeness</i>				
u	$+\frac{2}{3}$	$+\frac{1}{3}$	0				
d	$-\frac{1}{3}$	$+\frac{1}{3}$	0				
s	$-\frac{1}{3}$	$+\frac{1}{3}$	-1				
<b>Geometrical equations</b>							
arc length = $r\theta$							
circumference of circle = $2\pi r$							
area of circle = $\pi r^2$							
area of cylinder = $2\pi rh$							
volume of cylinder = $\pi r^2 h$							
area of sphere = $4\pi r^2$							
volume of sphere = $\frac{4}{3}\pi r^3$							

Turn over ▶

$$\text{magnitude of induced e.m.f.} = N \frac{\Delta\Phi}{\Delta t}$$

$$I_{\text{rms}} = \frac{I_0}{\sqrt{2}}$$

$$V_{\text{rms}} = \frac{V_0}{\sqrt{2}}$$

### Mechanical and Thermal Properties

$$\text{the Young modulus} = \frac{\text{tensile stress}}{\text{tensile strain}} = \frac{F}{A} \frac{l}{e}$$

$$\text{energy stored} = \frac{1}{2} Fe$$

$$\Delta Q = mc \Delta\theta$$

$$\Delta Q = ml$$

$$pV = \frac{1}{3} Nmc^2$$

$$\frac{1}{2} mc^2 = \frac{3}{2} kT = \frac{3RT}{2N_A}$$

### Nuclear Physics and Turning Points in Physics

$$\text{force} = \frac{eV_p}{d}$$

$$\text{force} = Bev$$

$$\text{radius of curvature} = \frac{mv}{Be}$$

$$\frac{eV}{d} = mg$$

$$\text{work done} = eV$$

$$F = 6\pi\eta rv$$

$$I = k \frac{I_0}{x^2}$$

$$\frac{\Delta N}{\Delta t} = -\lambda N$$

$$\lambda = \frac{h}{\sqrt{2meV}}$$

$$N = N_0 e^{-\lambda t}$$

$$T_{\frac{1}{2}} = \frac{\ln 2}{\lambda}$$

$$R = r_0 A^{\frac{1}{3}}$$

$$E = mc^2 = \frac{m_0 c^2}{\left(1 - \frac{v^2}{c^2}\right)^{\frac{1}{2}}}$$

$$l = l_0 \left(1 - \frac{v^2}{c^2}\right)^{\frac{1}{2}}$$

$$t = \frac{t_0}{\left(1 - \frac{v^2}{c^2}\right)^{\frac{1}{2}}}$$

### Astrophysics and Medical Physics

Body	Mass/kg	Mean radius/m
Sun	$2.00 \times 10^{30}$	$7.00 \times 10^8$
Earth	$6.00 \times 10^{24}$	$6.40 \times 10^6$

Sun	$2.00 \times 10^{30}$	$7.00 \times 10^8$
Earth	$6.00 \times 10^{24}$	$6.40 \times 10^6$

1 astronomical unit =  $1.50 \times 10^{11}$  m

1 parsec = 206265 AU =  $3.08 \times 10^{16}$  m = 3.26 ly

1 light year =  $9.45 \times 10^{15}$  m

Hubble constant ( $H$ ) =  $65 \text{ km s}^{-1} \text{ Mpc}^{-1}$

$M = \frac{\text{angle subtended by image at eye}}{\text{angle subtended by object at unaided eye}}$

$$M = \frac{f_o}{f_c}$$

$$m - M = 5 \log \frac{d}{10}$$

$$\lambda_{\text{max}} T = \text{constant} = 0.0029 \text{ m K}$$

$$v = Hd$$

$$P = \sigma AT^4$$

$$\frac{\Delta f}{f} = \frac{v}{c}$$

$$\frac{\Delta \lambda}{\lambda} = -\frac{v}{c}$$

$$R_s \approx \frac{2GM}{c^2}$$

### Medical Physics

$$\text{power} = \frac{1}{f}$$

$$\frac{1}{u} + \frac{1}{v} = \frac{1}{f} \text{ and } m = \frac{v}{u}$$

$$\text{intensity level} = 10 \log \frac{I}{I_0}$$

$$I = I_0 e^{-\mu x}$$

$$\mu_m = \frac{\mu}{\rho}$$

### Electronics

Resistors

Preferred values for resistors (E24)  
Series: 1.0 1.1 1.2 1.3 1.5 1.6 1.8 2.0 2.2 2.4 2.7 3.0 3.3 3.6 3.9 4.3 4.7 5.1 5.6 6.2 6.8 7.5 8.2 9.1 ohms  
and multiples that are ten times greater

$$Z = \frac{V_{\text{rms}}}{I_{\text{rms}}}$$

$$\frac{1}{C_T} = \frac{1}{C_1} + \frac{1}{C_2} + \frac{1}{C_3} + \dots$$

$$C_T = C_1 + C_2 + C_3 + \dots$$

$$X_C = \frac{1}{2\pi f C}$$

### Alternating Currents

$$f = \frac{1}{T}$$

### Operational amplifier

$$G = \frac{V_{\text{out}}}{V_{\text{in}}} \quad \text{voltage gain}$$

$$G = -\frac{R_f}{R_1} \quad \text{inverting}$$

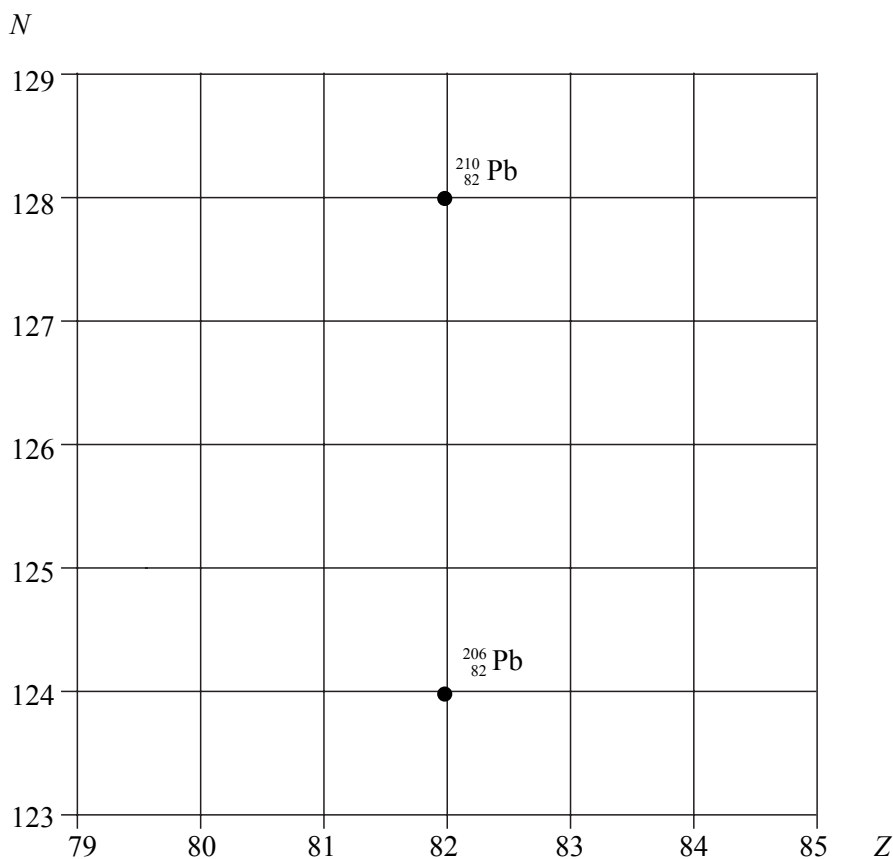
$$G = 1 + \frac{R_f}{R_1} \quad \text{non-inverting}$$

$$V_{\text{out}} = -R_f \left( \frac{V_1}{R_1} + \frac{V_2}{R_2} + \frac{V_3}{R_3} \right) \quad \text{summing}$$

## SECTION A: NUCLEAR INSTABILITY

Answer **all** of this question

- 1 (a) The lead nuclide  ${}_{82}^{210}\text{Pb}$  is unstable and decays in three stages through  $\alpha$  and  $\beta$  emissions to a different lead nuclide  ${}_{82}^{206}\text{Pb}$ . The position of these lead nuclides on a grid of neutron number,  $N$ , against proton number,  $Z$ , is shown below.



On the grid draw **three** arrows to represent one possible decay route.  
Label each arrow with the decay taking place.

(3 marks)

- (b) The copper nuclide  ${}_{29}^{64}\text{Cu}$  may decay by positron emission or by electron capture to form a nickel (Ni) nuclide.  
Complete the two equations that represent these two possible modes of decay.

positron emission  ${}_{29}^{64}\text{Cu}$

electron capture  ${}_{29}^{64}\text{Cu}$

(4 marks)

- (c) The nucleus of an atom may be investigated by scattering experiments in which radiation or particles bombard the nucleus.

Name **one** type of radiation or particle that may be used in this investigation and describe the main physical principle of the scattering process.

State the information which can be obtained from the results of this scattering.

You may be awarded marks for the quality of written communication in your answer.

.....

.....

.....

.....

.....

.....

(3 marks)

10

**TURN OVER FOR THE NEXT QUESTION**

**Turn over ▶**

**SECTION B: TURNING POINTS IN PHYSICS**Answer **all** questions.

2 Electrons are emitted by the process of *thermionic emission* from a metal wire in an *evacuated* container. The electrons are attracted to a metal anode which has a small hole at its centre. The anode is at a fixed *positive potential* relative to the wire. A beam of electrons emerges through the hole at constant velocity.

(a) Explain

(i) what is meant by thermionic emission,

.....

.....

.....

.....

(ii) why it is essential that the container is evacuated,

.....

.....

(iii) why the anode must be at a positive potential.

.....

.....

(4 marks)

- (b) An electron is accelerated from rest through a potential difference of 2500 V between the wire and the anode.

Calculate

- (i) the kinetic energy of the electron at the anode,

.....  
.....

- (ii) the speed of the electron at the anode. Ignore relativistic effects.

.....  
.....  
.....  
.....

(4 marks)

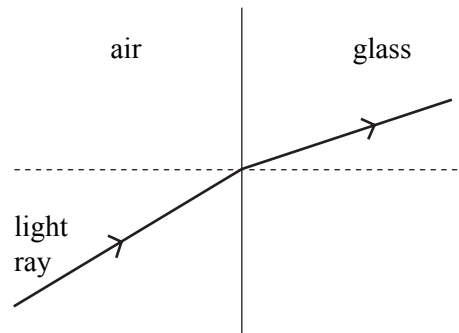


**TURN OVER FOR THE NEXT QUESTION**

**Turn over ▶**



- 3 (a) **Figure 1** shows the path followed by a light ray travelling from air into glass.



**Figure 1**

Use Newton's theory of light to explain the refraction of the light ray at the air/glass boundary.

.....

.....

.....

.....

.....

.....

.....

.....

.....

*(3 marks)*

- (b) Newton's theory of light was eventually abandoned in favour of Huygens' wave theory which correctly predicted the speed of light in glass in comparison with the speed of light in air.

- (i) What did each theory predict about the speed of light in glass in comparison with the speed of light in air?

.....

.....

.....

(ii) Describe **one** further piece of evidence that supports Huygens' wave theory.

.....

.....

.....

.....

.....

.....

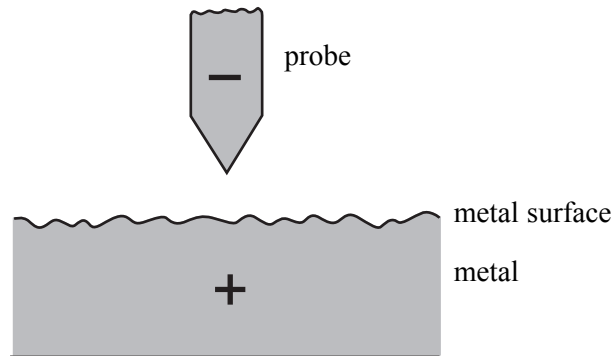
*(3 marks)*

6

**TURN OVER FOR THE NEXT QUESTION**

**Turn over ▶**

- 4 **Figure 2** shows the probe tip of a scanning tunnelling microscope (STM) above a metal surface. The probe tip is at a constant negative potential relative to the metal surface.



**Figure 2**

- (a) Explain why electrons can cross the gap between the probe tip and the surface, provided the gap is sufficiently narrow.

You may be awarded marks for the quality of written communication in your answer.

.....

.....

.....

.....

.....

.....

.....

.....

.....

(4 marks)

(b) Describe **one** way in which an STM is used to investigate a surface.

.....

.....

.....

.....

.....

.....

.....

(3 marks)

$\frac{7}{7}$

**TURN OVER FOR THE NEXT QUESTION**

**Turn over ▶**

- 5 (a) One of the two postulates of Einstein's theory of special relativity is that *physical laws have the same form in all inertial frames of reference*.

Explain, with the aid of a suitable example, what is meant by an inertial frame of reference.

.....

.....

.....

.....

.....

.....

(2 marks)

- (b) A certain type of sub-atomic particle has a half-life of 18 ns when at rest. A beam of these particles travelling at a speed of  $0.995c$  is produced in an accelerator.

- (i) Calculate the half-life of these particles in the laboratory frame of reference.

.....

.....

.....

.....

.....

- (ii) Calculate the time taken by these particles to travel a distance of 108 m in the laboratory at a speed of  $0.995c$  and hence show that the intensity of the beam is reduced to 25% of its original value over this distance.

.....

.....

.....

.....

.....

.....

.....

.....

.....

(5 marks)

$\frac{7}{7}$

**QUALITY OF WRITTEN COMMUNICATION** (2 marks)

$\frac{2}{2}$

**END OF QUESTIONS**